

NOVEMBER

OPTIONAL PRACTICE (ENGLISH – MATH) 😊



WRITE THE NAME OF THE ANIMAL  
IN THE BOX BELOW.





lion	zebra	giraffe
elephant	rhino	monkey

Name \_\_\_\_\_

## The letter Mm

Find and color or circle all the pictures that begin with the letter Mm. Print the letter Mm under the picture.



Name: \_\_\_\_\_

## Beginning Sound

Color the pictures that begin with the sound of the letter




H



# Reading Comprehension

Name: \_\_\_\_\_



Directions: Read the text 3 times and color the snowflakes.

Jack is playing outside.  
Jack likes to make snowballs.  
He likes to play with his friends.  
Jack is so happy.



1. Who is this story about?

\_\_\_\_\_

-----

\_\_\_\_\_

2. Who does Jack like to play with?

\_\_\_\_\_

-----

\_\_\_\_\_

3. Jack likes to make \_\_\_\_\_.

a.



b.



c.



© Winnie Kids 2017

COMPLETE THE MISSING NUMBERS:

Name \_\_\_\_\_ Date \_\_\_\_\_

1		3		5			8		10
11				15		17		19	
21		23			26			29	
31		33		35			38		40
	42		44			47		49	

Name : \_\_\_\_\_

Score : \_\_\_\_\_

## Recognize the line of symmetry

Sheet 1

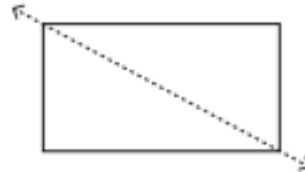
Is the dotted line on each shape a line of symmetry? Write yes or no.

1)



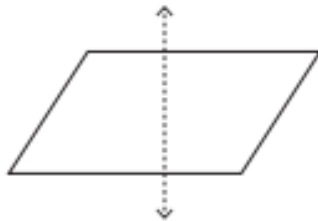
\_\_\_\_\_

2)



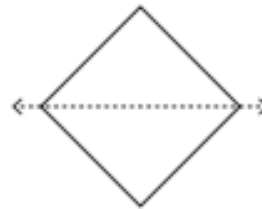
\_\_\_\_\_

3)



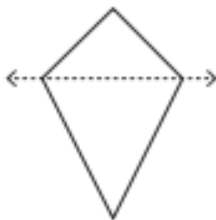
\_\_\_\_\_

4)



\_\_\_\_\_

5)



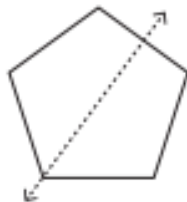
\_\_\_\_\_

6)




\_\_\_\_\_

7)



\_\_\_\_\_

8)



\_\_\_\_\_



$3+1$

$2+4$

$0+1$

$4+4$

$3+0$

$1+0$

$2+2$

$4+1$

$3+2$

$2+1$

$5+3$

$1+5$

blue

4

red

1

purple

8

yellow

6

green

3






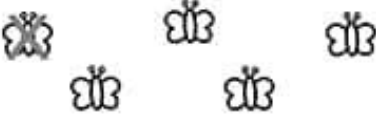



orange

5

LOOK AT THE X, REMEMBER THAT WHEN WE HAVE AN X, IT MEANS THAT THOSE ITEMS WERE ALREADY TAKEN, THEY DON'T EXIST ANYMORE.

IN THE FIRST EXAMPLE, REMEMBER THE TOTAL OF ITEMS THAT YOU HAVE: 5 BUTTERFLIES, BUT 3 OF THEM FLEW AWAY. HOW MANY BUTTERFLIES CAN YOU SEE NOW?

5 IN TOTAL – 3 THAT AREN'T THERE ANYMORE = 2       $5 - 3 = 2$ , TRY TO DO THE REST! 😊

 <b>SUPERSTAR WORKSHEETS</b>	<b>Subtraction from 5</b>	
Write the equation the picture represents.		
 _____ - _____ = _____	 _____ - _____ = _____	
 _____ - _____ = _____	 _____ - _____ = _____	
 _____ - _____ = _____	 _____ - _____ = _____	
 _____ - _____ = _____	 _____ - _____ = _____	